



Transition Task. Chapter 1 - Algebraic Expressions.
Chapter 2 – Quadratics. Chapter 3 - Equations and Inequalities



Instruction – Transition Task

Aim to complete this booklet independently, as it is designed to help you develop your skills and understanding. If you find yourself needing support, you can refer to the written solutions available on the Urmston Grammar website. Once you have completed each section, make sure to mark all your work in green pen.

First few lessons at Urmston Grammar – Skills Test

During your first few lessons at Urmston Grammar, you will take part in two revision sessions in preparation for a skills test. Following the skills test, we may invite you to attend additional lunchtime support sessions. These are designed to help you build confidence and strengthen key skills, ensuring you get the most out of your time with us.

We are committed to supporting your learning and are here to help every step of the way to ensure you achieve your best in your mathematics A Level.



Transition Task. Chapter 1 - Algebraic Expressions.
Chapter 2 – Quadratics. Chapter 3 - Equations and Inequalities



Diagnostic for Chapter 1 Algebraic Expressions

1 Simplify:

a $4m^2n + 5mn^2 - 2m^2n + mn^2 - 3mn^2$

b $3x^2 - 5x + 2 + 3x^2 - 7x - 12$

← GCSE Mathematics

2 Write as a single power of 2:

a $2^5 \times 2^3$ **b** $2^6 \div 2^2$

c $(2^3)^2$ ← GCSE Mathematics

3 Expand:

a $3(x + 4)$ **b** $5(2 - 3x)$

c $6(2x - 5y)$ ← GCSE Mathematics

4 Write down the highest common factor of:

a 24 and 16 **b** $6x$ and $8x^2$

c $4xy^2$ and $3xy$ ← GCSE Mathematics

5 Simplify:

a $\frac{10x}{5}$ **b** $\frac{20x}{2}$ **c** $\frac{40x}{24}$



1A Indices

1. Simplify $(a^3)^2 \times 2a^2$

2. Simplify $(4x^3y)^3$

3. Simplify $2x^2(3 + 5x) - x(4 - x^2)$

4. Simplify $\frac{x^3 - 2x}{3x^2}$

1B Brackets: Expanding

Expand and simplify the following

1. $(x + 1)(x + 2)(x + 3)$

2. $(x + 5)(x - 2)(x + 1)$



Transition Task. Chapter 1 - Algebraic Expressions.
Chapter 2 – Quadratics. Chapter 3 - Equations and Inequalities



3. $2(x - 3)(x - 4)$

4. $(2x - 1)^3$

1C Brackets: Factorising

1. $x^2 - 5x - 14$

2. $2x^2 + 5x - 12$

3. $4x^2 - 9$

4. $x^3 - x$

5. $x^3 + 3x^2 + 2x$



1D Negative and Fractional Indices

1. Prove that $x^{\frac{1}{2}} = \sqrt{x}$

2. Evaluate $27^{-\frac{1}{3}}$

3. Evaluate $32^{\frac{2}{5}}$

4. Simplify $\left(\frac{1}{9}x^6y\right)^{\frac{1}{2}}$

2. Evaluate $\left(\frac{27}{8}\right)^{-\frac{2}{3}}$

6. If $b = \frac{1}{9}a^2$, determine $3b^{-2}$ in the form ka^n where k, n are constants



Transition Task. Chapter 1 - Algebraic Expressions.
Chapter 2 – Quadratics. Chapter 3 - Equations and Inequalities



1E Surds:

Simplify:

1. $\sqrt{3} \times 2$

2. $3\sqrt{5} \times 2\sqrt{5}$

3. $\sqrt{8}$

4. $\sqrt{12} + \sqrt{27}$

2. $(\sqrt{8} + 1)(\sqrt{2} - 3)$

1F Rationalising the denominator:

1. $\frac{3}{\sqrt{2}}$

2. $\frac{6}{\sqrt{3}}$

3. $\frac{7}{\sqrt{7}}$

4. $\frac{15}{\sqrt{5}} + \sqrt{5}$



More Complicated Rationalising the Denominator

1. $\frac{1}{\sqrt{2}+1}$

2. $\frac{3}{\sqrt{6}-2}$

3. $\frac{4}{\sqrt{3}+1}$



Transition Task. Chapter 1 - Algebraic Expressions.
Chapter 2 – Quadratics. Chapter 3 - Equations and Inequalities



4. $\frac{3\sqrt{2}+4}{5\sqrt{2}-7}$

5. Solve $y(\sqrt{3} - 1) = 8$

Give your answer in the form $a + b\sqrt{3}$ where a and b are integers.

Need a recap of the content in this chapter? Use this QR code to watch a Bicen maths YouTube video.





Exam Questions on Chapter 1

Q1.

a) Simplify

$$\sqrt{32} + \sqrt{18}$$

giving your answer in the form $a\sqrt{2}$, where a is an integer.

(2)

(b) Simplify

$$\frac{\sqrt{32} + \sqrt{18}}{3 + \sqrt{2}}$$

giving your answer in the form $b\sqrt{2} + c$, where b and c are integers.

(4)

Total 6 marks



Transition Task. Chapter 1 - Algebraic Expressions.
Chapter 2 – Quadratics. Chapter 3 - Equations and Inequalities



Q2.

(a) Evaluate $(32)^{\frac{3}{5}}$, giving your answer as an integer.

(2)

(b) Simplify fully $\left(\frac{25x^4}{4}\right)^{\frac{1}{2}}$

(2)

(Total 4 marks)

Q3.

Given that $32\sqrt{2} = 2^a$, find the value of a .

(3)

(Total 3 marks)



Transition Task. Chapter 1 - Algebraic Expressions.
Chapter 2 – Quadratics. Chapter 3 - Equations and Inequalities



Q4.

(a) Expand and simplify $(7 + \sqrt{5})(3 - \sqrt{5})$

(3)

(b) Express $\frac{7 + \sqrt{5}}{3 + \sqrt{5}}$ in the form $a + b\sqrt{5}$, where a and b are integers.

(3)

(Total 6 marks)



Transition Task. Chapter 1 - Algebraic Expressions.
Chapter 2 – Quadratics. Chapter 3 - Equations and Inequalities



Q5.

Simplify

(a) $(3\sqrt{7})^2$

(1)

(b) $(8 + \sqrt{5})(2 - \sqrt{5})$

(3)

(Total 4 marks)

Q6.

Express 8^{2x+3} in the form 2^y , stating y in terms of x .

(2)

(Total 2 marks)



Diagnostic for Chapter 2 Quadratics

<p>1 Solve the following equations:</p> <p>a $3x + 6 = x - 4$</p> <p>b $5(x + 3) = 6(2x - 1)$</p> <p>c $4x^2 = 100$</p> <p>d $(x - 8)^2 = 64$ ← GCSE Mathematics</p>	<p>2 Factorise the following expressions:</p> <p>a $x^2 + 8x + 15$ b $x^2 + 3x - 10$</p> <p>c $3x^2 - 14x - 5$ d $x^2 - 400$</p>
<p>3 Sketch the graphs of the following equations, labelling the points where each graph crosses the axes:</p> <p>a $y = 3x - 6$ b $y = 10 - 2x$</p> <p>c $x + 2y = 18$ d $y = x^2$</p> <p>← GCSE Mathematics</p>	<p>4 Solve the following inequalities:</p> <p>a $x + 8 < 11$ b $2x - 5 \geq 13$</p> <p>c $4x - 7 \leq 2(x - 1)$ d $4 - x < 11$</p> <p>← GCSE Mathematics</p>



2A and 2B Solving Quadratic Equations

By factorisation

1. $x^2 + 5x - 6 = 0$

Using the Quadratic Formula

2. $x^2 + 5x - 6 = 0$

Questions

1. $(x - 1)^2 = 5$

2. Solve $x - 6\sqrt{x} + 8 = 0$

3. $\sqrt{x + 3} = x - 3$

4. $2x + \sqrt{x} - 1 = 0$



2C and 2D Solving by Completing the Square

1. $x^2 + 12x$

3. $x^2 - 2x$

2. $x^2 + 8x$

4. $x^2 - 6x + 7$

More complicated questions (a not equal to 1):

1. Express $2x^2 + 12x + 7$ in the form $a(x + b)^2 + c$

2. Express $5 - 3x^2 + 6x$ in the form $a - b(x + c)^2$



3. Express $3x^2 - 18x + 4$ in the form $a(x + b)^2 + c$

4. Express $20x - 5x^2 + 3$ in the form $a - b(x + c)^2$

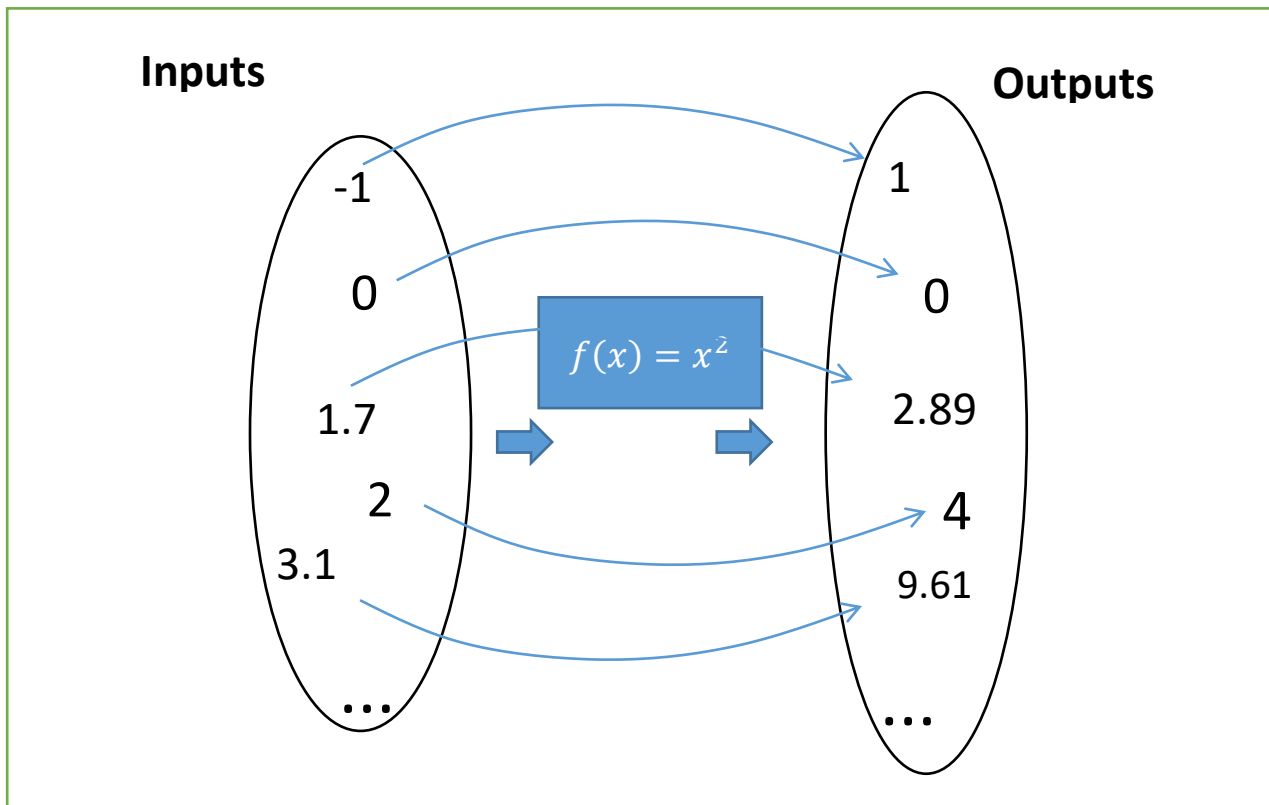
Solving by Completing the Square:

Note: Previously we factorised out the 3. This is because $3x^2 - 18x + 4$ on its own is an **expression**, so dividing by 3 (instead of factorising) would change the expression. However, in an equation, we can divide both sides by 3 without affecting the solutions.

1. Solve the equation $3x^2 - 18x + 4 = 0$ by completing the square.



2E Functions:



Questions

1. If $f(x) = x^2 - 3x$ and $g(x) = x + 5$, $x \in \mathbb{R}$

- Find $f(-4)$
- Find the values of x for which $f(x) = g(x)$
- Find the roots of $f(x)$.
- Find the roots of $g(x)$.



Transition Task. Chapter 1 - Algebraic Expressions.
Chapter 2 – Quadratics. Chapter 3 - Equations and Inequalities



2. Determine the minimum value of the function $f(x) = x^2 - 6x + 2$, and state the value of x for which this minimum occurs.

3. Find the minimum value of $f(x) = 2x^2 + 12x - 5$ and state the value of x for which this occurs.

4. Find the roots of the function $f(x) = 2x^2 + 3x + 1$

5. Find the roots of the function $f(x) = x^4 - x^2 - 6$



Transition Task. Chapter 1 - Algebraic Expressions.
Chapter 2 – Quadratics. Chapter 3 - Equations and Inequalities



2F Quadratic Graphs:

1. Sketch the graph of $y = x^2 + 3x - 4$ and find the coordinates of the turning point.

2. Sketch the graph of $y = 4x - 2x^2 - 3$ and find the coordinates of the turning point. Write down the equation of the line of symmetry.



Transition Task. Chapter 1 - Algebraic Expressions.
Chapter 2 – Quadratics. Chapter 3 - Equations and Inequalities



Sketch the following, indicating any intercepts with the axis, the turning point and the equation of the line of symmetry.

1. $y = x^2 + 4$

2. $y = x^2 - 7x + 10$

3. $y = 5x + 3 - 2x^2$

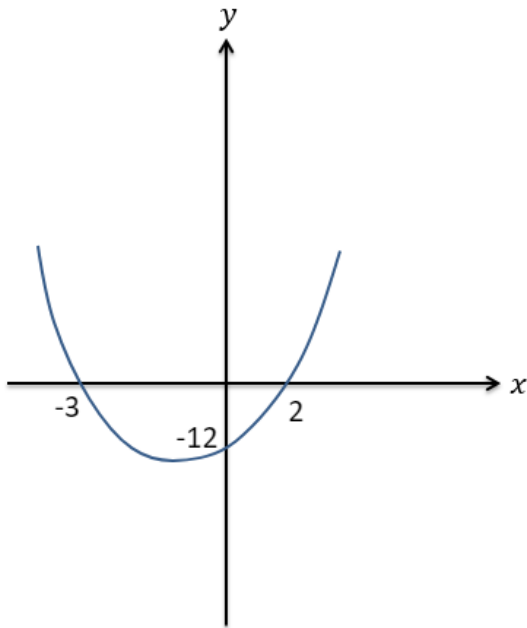
4. $y = x^2 + 4x + 11$



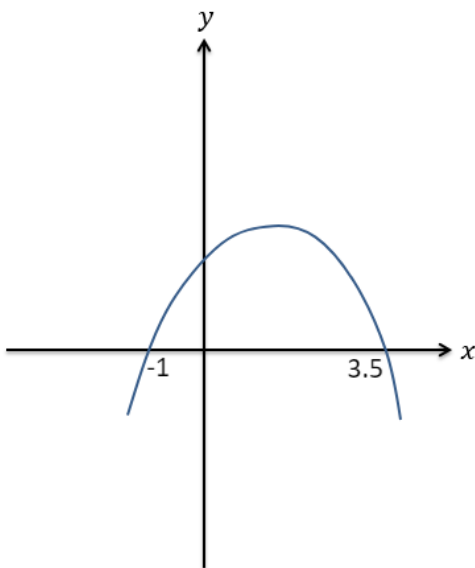
Transition Task. Chapter 1 - Algebraic Expressions.
Chapter 2 – Quadratics. Chapter 3 - Equations and Inequalities



Determine the equation of this quadratic graph in the form $y = ax^2 + bx + c$

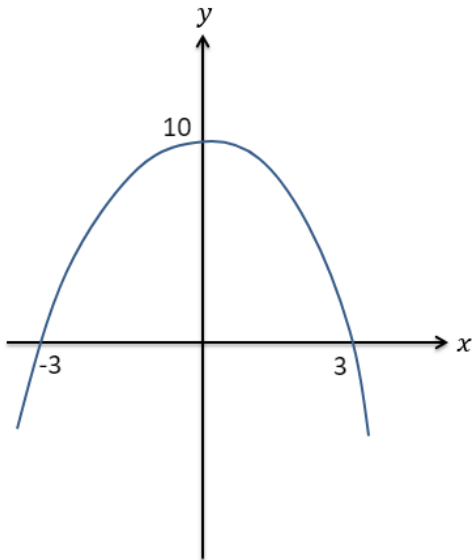


Determine the equation of this quadratic graph in the form $y = ax^2 + bx + c$





Determine the equation of this quadratic graph in the form $y = ax^2 + bx + c$





2G The Discriminant

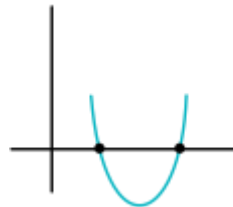
The **quadratic formula** is used to solve any quadratic equation of the form

$$ax^2 + bx + c = 0, \text{ and it looks like this:}$$

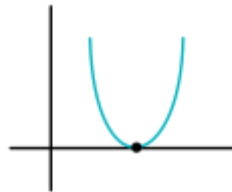
$$x = \frac{-b \pm \sqrt{b^2 - 4ac}}{2a}$$

The part under the square root, $b^2 - 4ac$, is called the **discriminant**. It helps us understand what kind of solutions the quadratic equation will have *before* solving it. Here's what the discriminant tells us:

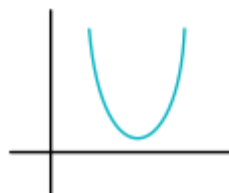
- **If the discriminant is positive ($b^2 - 4ac > 0$):** There are **two real solutions**. Intercepts the x-axis twice.



- **If the discriminant is zero ($b^2 - 4ac = 0$):** There is **one real solution**. Touches the x-axis once and has a repeated root.



- **If the discriminant is negative ($b^2 - 4ac < 0$):** There are **no real solutions**, therefore does not cross the x-axis.



Understanding the discriminant helps you quickly predict the number and type of solutions before going through the full solving process.



Transition Task. Chapter 1 - Algebraic Expressions.
Chapter 2 – Quadratics. Chapter 3 - Equations and Inequalities



Quick fire questions:

Equation	Discriminant	No. of distinct real roots
$x^2 + 3x + 4 = 0$		
$x^2 - 4x + 1 = 0$		
$x^2 - 4x + 4 = 0$		
$2x^2 - 6x - 3 = 0$		
$x - 4 - 3x^2 = 0$		
$1 - x^2 = 0$		

Harder Exam Question

8. The equation $x^2 + 2px + (3p + 4) = 0$, where p is a positive constant, has equal roots.

(a) Find the value of p .

(4)

(b) For this value of p , solve the equation $x^2 + 2px + (3p + 4) = 0$.

(2)



Harder Exam Questions

1. $x^2 + 5kx + (10k + 5) = 0$ where k is a positive constant.

Given that this equation has equal roots, determine the value of k .

2. Find the range of values of k for which $x^2 + 6x + k = 0$ has two distinct real solutions.



Quadratics exam style question

A ball is thrown upwards from a rooftop 80m above the ground. It will reach a maximum vertical height and then fall back to the ground.

The height of the ball from ground at time t is h , given by the formula:

$$h = -16t^2 + 64t + 80$$

- a) Calculate the height reached by the ball after 1 second.
- b) Calculate the maximum height reached by the ball and after how many seconds from when it is thrown this maximum height is reached.
- c) Calculate how long will it take before the ball hits the ground.

Need a recap of the content in this chapter? Use this QR code to watch a Bicen maths YouTube video.





Exam Questions on Chapter 2

Q1.

The equation

$$(p - 1)x^2 + 4x + (p - 5) = 0, \text{ where } p \text{ is a constant}$$

has no real roots.

(a) Show that p satisfies $p^2 - 6p + 1 > 0$

(3)

(b) Hence find the set of possible values of p .

(4)

(Total for question = 7 marks)



Q2.

In this question you must show all stages of your working.

Solutions relying on calculator technology are not acceptable.

(i) Solve the equation

$$x\sqrt{2} - \sqrt{18} = x$$

writing the answer as a surd in simplest form.

(3)

(ii) Solve the equation

$$4^{3x-2} = \frac{1}{2\sqrt{2}}$$

(3)

(Total for question = 6 marks)



Q3.

$$4x - 5 - x^2 = q - (x + p)^2$$

where p and q are integers.

(a) Find the value of p and the value of q .

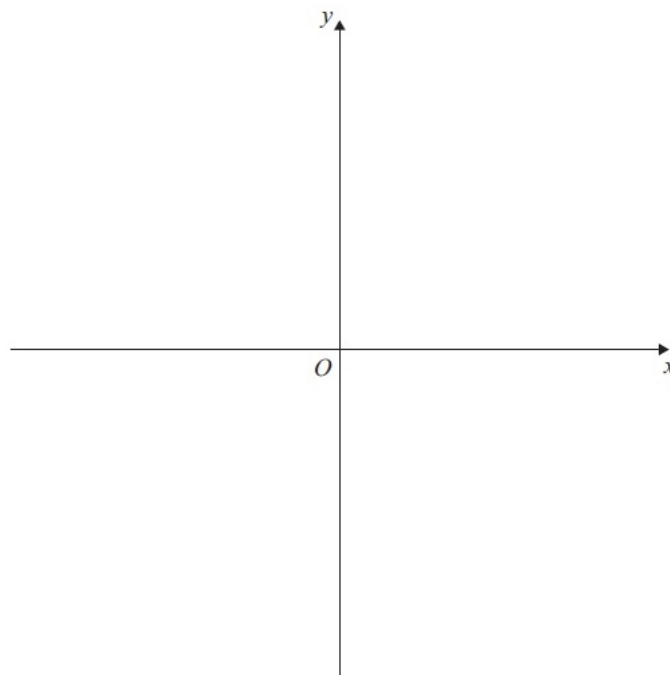
(3)

(b) Calculate the discriminant of $4x - 5 - x^2$

(2)

(c) On the axes, sketch the curve with equation $y = 4x - 5 - x^2$ showing clearly the coordinates of any points where the curve crosses the coordinate axes.

(3)



(Total 8 marks)



Transition Task. Chapter 1 - Algebraic Expressions.
Chapter 2 – Quadratics. Chapter 3 - Equations and Inequalities



Q4.

$$f(x) = x^2 + (k + 3)x + k$$

where k is a real constant.

(a) Find the discriminant of $f(x)$ in terms of k .

(2)

(b) Show that the discriminant of $f(x)$ can be expressed in the form $(k + a)^2 + b$, where a and b are integers to be found.

(2)

(c) Show that, for all values of k , the equation $f(x) = 0$ has real roots.

(2)

(Total 6 marks)



Transition Task. Chapter 1 - Algebraic Expressions.
Chapter 2 – Quadratics. Chapter 3 - Equations and Inequalities



Q5.

The equation $x^2 + 3px + p = 0$, where p is a non-zero constant, has equal roots.

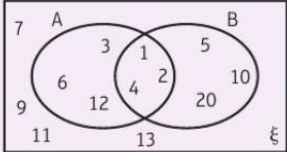
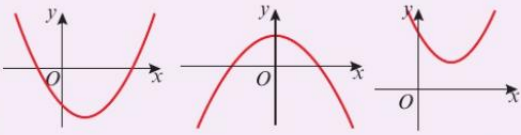
Find the value of p .

(4)

(Total 4 marks)



Diagnostic for Chapter 3 Equations and Inequalities

<p>1 $A = \{\text{factors of } 12\}$ $B = \{\text{factors of } 20\}$ Write down the numbers in each of these sets:</p> <p>a $A \cap B$ b $(A \cup B)'$</p> 	<p>2 Simplify these expressions.</p> <p>a $\sqrt{75}$ b $\frac{2\sqrt{45} + 3\sqrt{32}}{6}$</p>
<p>3 Match the equations to the correct graph. Label the points of intersection with the axes and the coordinates of the turning point.</p> <p>a $y = 9 - x^2$ b $y = (x - 2)^2 + 4$ c $y = (x - 7)(2x + 5)$</p> <p>i ii iii</p> 	



3A Simultaneous Equations

You can do this on your calculator – check every question on your calculator, make sure you come at the beginning of the year with an A-Level standard calculator.

Solve the simultaneous equations

$$3x + y = 8$$

$$2x - 3y = 9$$

Method 1 : Elimination

Method 2: Substitution



3B Linear and Quadratic

1. Solve the simultaneous equations:

$$x + 2y = 3$$

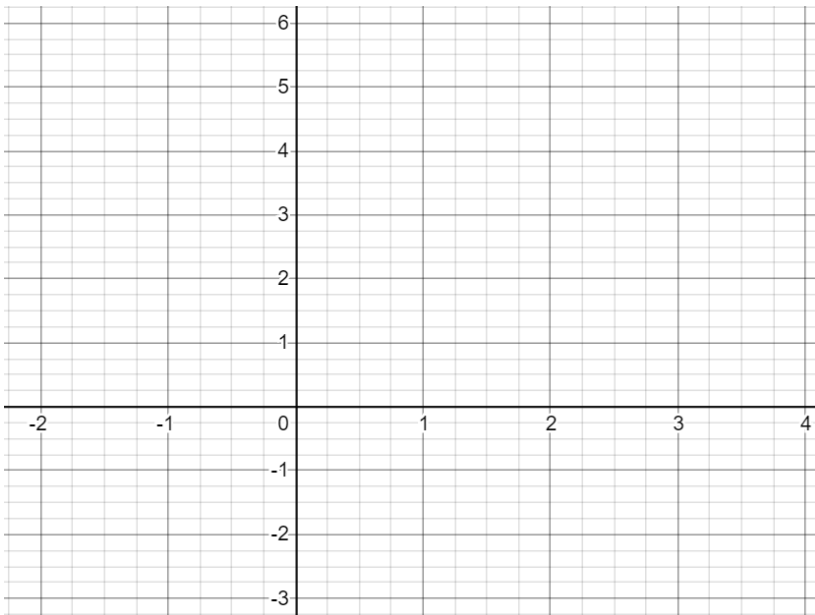
$$x^2 + 3xy = 10$$

2. Solve the simultaneous equations: $3x^2 + y^2 = 21$ and $y = x + 1$



3C Simultaneous Equations and Graphs

1a. On the same axes, draw the graphs of $2x + y = 3$ and $y = x^2 - 3x + 1$



1b. Use your graph to write down the solutions to the simultaneous equations

1c. What algebraic method could we have used to show the graphs would have intersected twice?

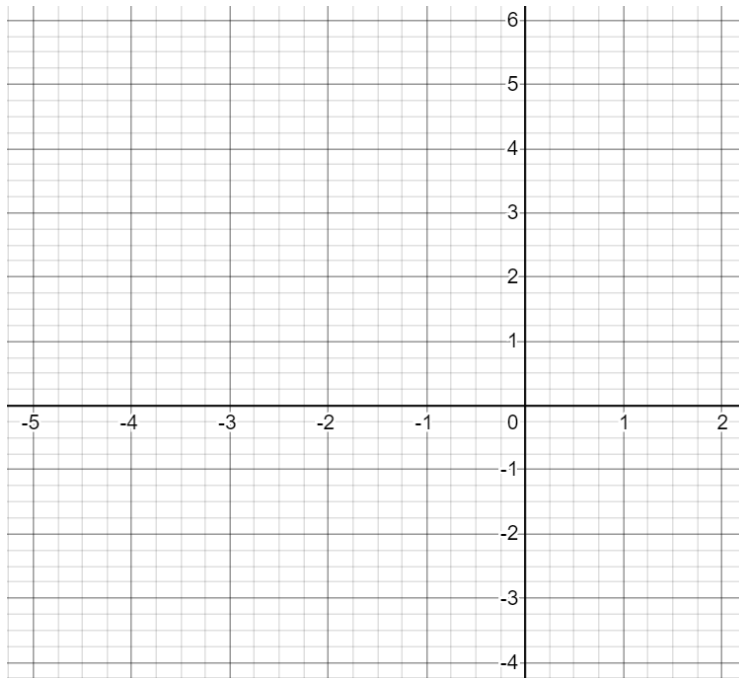


Transition Task. Chapter 1 - Algebraic Expressions.
Chapter 2 – Quadratics. Chapter 3 - Equations and Inequalities



2.a) On the same axes, draw the graphs of:

$$y = 2x - 2 \quad y = x^2 + 4x + 1$$



b) Prove algebraically that the lines never meet



Exam Style Question

The line with equation $y = 2x + 1$ meets the curve with equation $kx^2 + 2y + (k - 2) = 0$ at exactly one point. Given that k is a positive constant:

- a) Find the value of k .
- b) For this value of k , find the coordinates of this point of intersection



3D 3E Set Builder Notation

Recap from GCSE:

- We use curly braces to list the values in a set, e.g. $A = \{1,4,6,7\}$
- If A and B are sets then $A \cap B$ is the **intersection** of A and B , giving a set which has the elements in A **and** B .
- $A \cup B$ is the **union** of A and B , giving a set which has the elements in A **or** in B .
- \emptyset is the empty set, i.e. the set with nothing in it.
- Sets can also be infinitely large. \mathbb{N} is the set of natural numbers (all positive integers), \mathbb{Z} is the set of all integers (including negative numbers and 0) and \mathbb{R} is the set of all real numbers (including all possible decimals).
- We write $x \in A$ to mean " x is a member of the set A ". So $x \in \mathbb{R}$

Quick Fire Examples

$$\{1,2,3\} \cap \{3,4,5\} =$$

$$\{1,2,3\} \cup \{3,4,5\} =$$

$$\{1,2\} \cap \{3,4\} =$$

1. $\{2x : x \in \mathbb{Z}\}$

2. $\{2^x : x \in \mathbb{N}\}$

3. $\{xy : x, y \text{ are prime}\}$



Solving Inequalities

Linear inequalities

1. $2x + 1 > 5$

2. $3(x - 5) \geq 5 - 2(x - 8)$

3. $-x \geq 2$

Combining Inequalities

When combining inequalities always draw a number line to help!

Example:

If $x < 3$ and $2 \leq x < 4$, what is the combined solution set?



Quadratic Inequalities:

1. Solve $x^2 + 2x - 15 > 0$

2. Solve $x^2 + 2x - 15 \leq 0$

3. Solve $x^2 + 5x \geq -4$

4. Solve $x^2 < 9$



Transition Task. Chapter 1 - Algebraic Expressions.
Chapter 2 – Quadratics. Chapter 3 - Equations and Inequalities



3D 3E Division by x

Find the set of values for which $\frac{6}{x} > 2$, $x \neq 0$



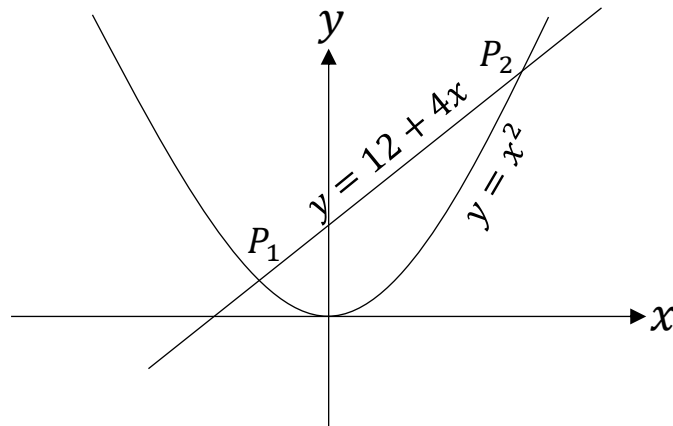
3F 3G Sketching Inequalities:

1. L_1 has equation $y = 12 + 4x$. L_2 has equation $y = x^2$.

The diagram shows a sketch of L_1 and L_2 on the same axes.

- Find the coordinates of P_1 and P_2 , the points of intersection.
- Hence write down the solution to the inequality

$$12 + 4x > x^2.$$





Transition Task. Chapter 1 - Algebraic Expressions.
Chapter 2 – Quadratics. Chapter 3 - Equations and Inequalities



2. Shade the region that satisfies the inequalities:

$$2y + x < 14$$

$$y \geq x^2 - 3x - 4$$

Need a recap of the content in this chapter? Use this QR code to watch a Bicen maths YouTube video.





Transition Task. Chapter 1 - Algebraic Expressions.
Chapter 2 – Quadratics. Chapter 3 - Equations and Inequalities



Exam Style Questions

Q1.

Find the set of values of x for which

(a) $2(3x + 4) > 1 - x$

(2)

(b) $3x^2 + 8x - 3 < 0$

(4)

(Total 6 marks)



Transition Task. Chapter 1 - Algebraic Expressions.
Chapter 2 – Quadratics. Chapter 3 - Equations and Inequalities



Q2.

Find the set of values of x for which

(a) $4x - 3 > 7 - x$

(2)

(b) $2x^2 - 5x - 12 < 0$

(4)

(c) **both** $4x - 3 > 7 - x$ **and** $2x^2 - 5x - 12 < 0$

(1)

(Total 7 marks)



Transition Task. Chapter 1 - Algebraic Expressions.
Chapter 2 – Quadratics. Chapter 3 - Equations and Inequalities



Q3.

The equation

$$(k + 3)x^2 + 6x + k = 5, \text{ where } k \text{ is a constant,}$$

has two distinct real solutions for x .

(a) Show that k satisfies

$$k^2 - 2k - 24$$

(4)

(b) Hence find the set of possible values of k .

(3)

(Total 7 marks)



Transition Task. Chapter 1 - Algebraic Expressions.
Chapter 2 – Quadratics. Chapter 3 - Equations and Inequalities



Q4.

Find the set of values of x for which

(a) $3x - 7 > 3 - x$

(2)

(b) $x^2 - 9x \leq 36$

(4)

(c) **both** $3x - 7 > 3 - x$ **and** $x^2 - 9x \leq 36$

(1)

(Total 7 marks)